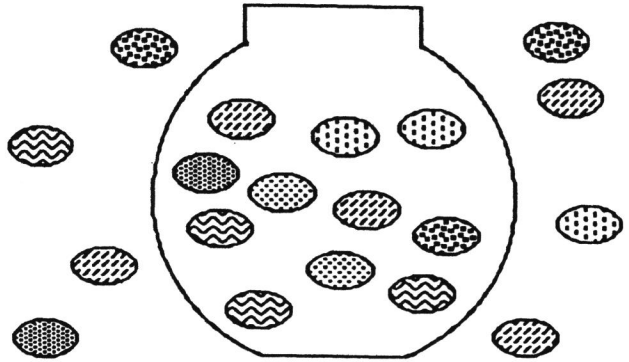


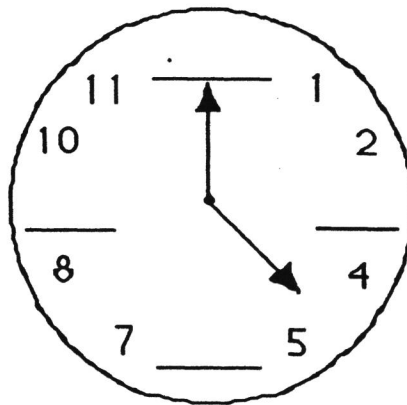
SUNSHINE MATH - K
Mercury, 9

★ 1. _____
(FIRST NAME) (LAST NAME)

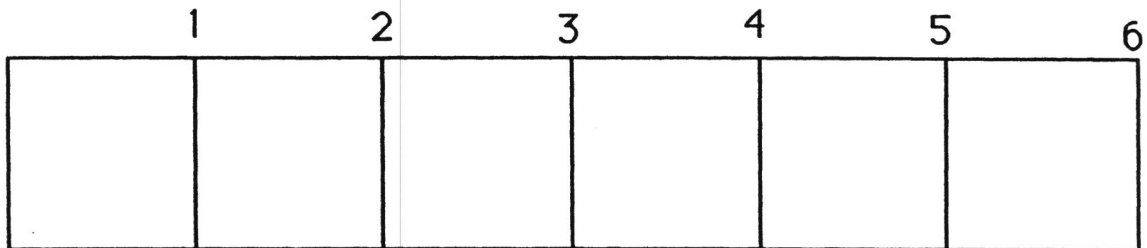
★ 2. How many
jellybeans
are in the
bowl?



★ 3. Fill in the
missing
numbers on
this clock.



★★ 4. Color in a segment that is 4 inches
long. (Each square is 1 inch long.)



★★★★ 5. How many letters are there in the alphabet? _____

A	B	C	D	E	F	G	H	I
J	K	L	M	N	O	P	Q	R
S	T	U	V	W	X	Y	Z	

★★★★ 6. Circle Sunday, June 14.

JUNE 1998						
S Sunday	M Monday	Tu Tuesday	W Wednesday	Th Thursday	F Friday	S Saturday
	1	2	3	4	5	6
7	8	9	10	11	12	13
14	15	16	17	18	19	20
21	22	23	24	25	26	27
28	29	30				

(Parents: Reading the problem to your child is ALWAYS okay. If you help them solve the problems, please initial the problem and they will receive partial credit.)