

SUNSHINE MATH - K
Mercury, 8

★ 1. _____
(FIRST NAME) (LAST NAME)

★★ 2. Write in the numbers from 1 to 10.

_____	_____	_____	_____	_____
_____	_____	_____	_____	_____

★ 3. Efrem is 7 years old.

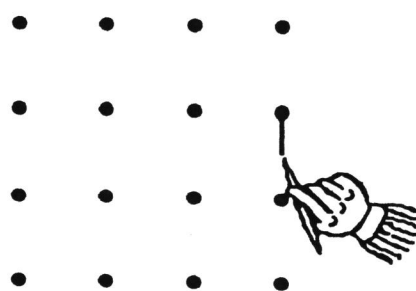
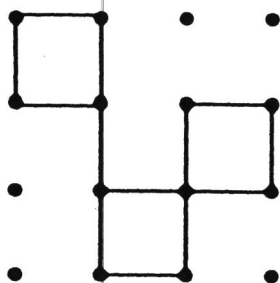
Stephanie is 9 years old.

Who is older?


Put a ✓ in the box.




★★★★ 4. Copy this pattern.....over to here.



★★★ 5. Color 4 squares that touch each other to make 1 big square.



★★★★ 6. Color 6 squares that touch each other to make a rectangle.



(Parents: Reading the problem to your child is ALWAYS okay. If you help them solve the problems, please initial the problem and they will receive partial credit.)