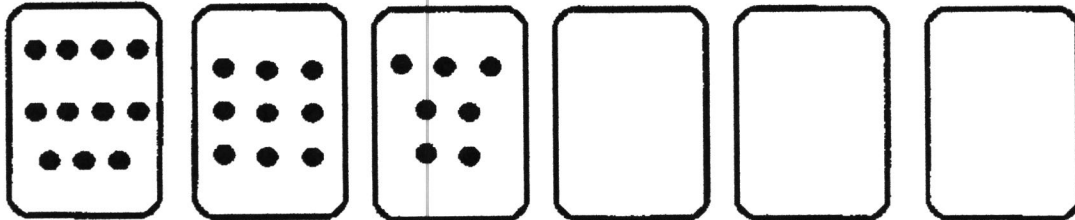


SUNSHINE MATH - 1
Venus, V

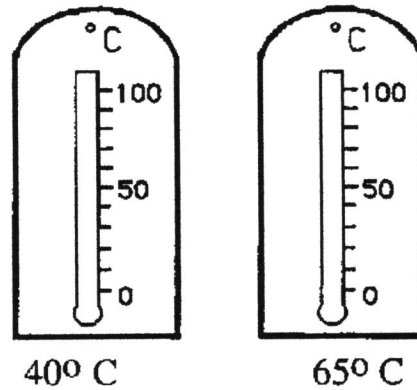
Name: _____

(This shows my own thinking.)

- ★★★★ 1. Count the number of dots on each card. Find a pattern.
Use the pattern to fill in the empty cards with dots.



- ★★ 2. On each thermometer, darken in the center to show the temperature given.




- ★ 3. Use + or - in each box to make the sentence true.

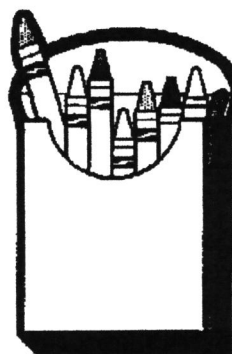
$$3 \square 4 \square 2 \square 6 = 11$$

- ★ 4. Three children divided up the 6 cookies fairly. How many did each child get?

Answer: Each got _____ cookies

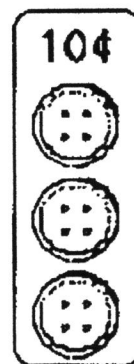


- ★★★ 5. If you took the crayons in the box and broke them in half, how many children could have something to color with?




Answer: _____ children

- ★★★ 6. Tamika can buy 3 buttons for a dime. She needs 12 buttons for a project. How much will they cost?

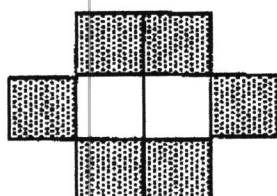


Answer: _____¢

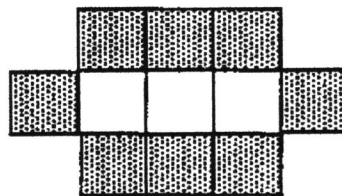
- ★★★★ 7. How many gray squares are needed to continue the pattern?



1 white square
4 gray squares



2 white squares
6 gray squares



3 white squares 4 white squares
8 gray squares 2 gray squares

Answer: _____ gray squares

- ★★★ 8. (a) Name a body part that you have 2 of: _____

(b) Name a body part that you have 10 of: _____

(c) Name a body part that you have more than 100 of:
